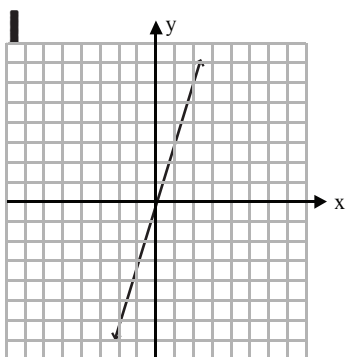
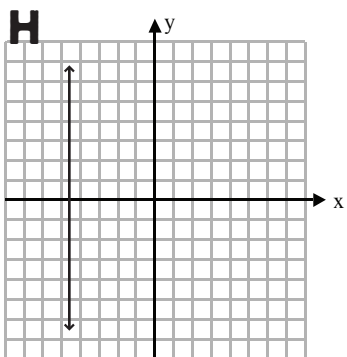
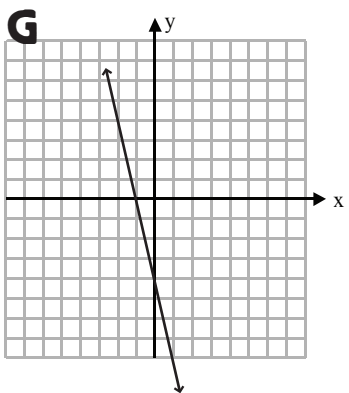
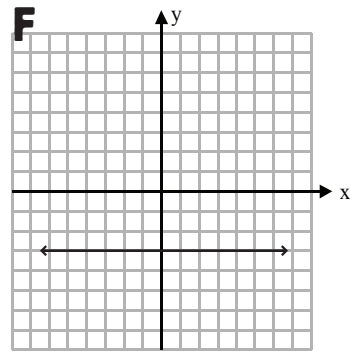
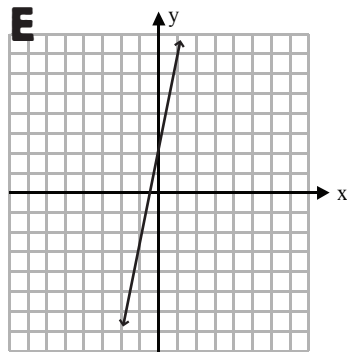
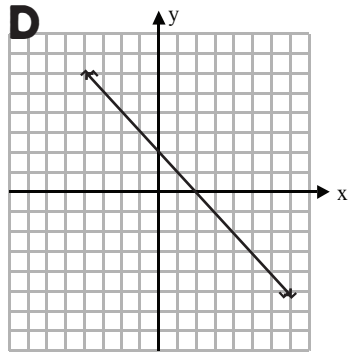
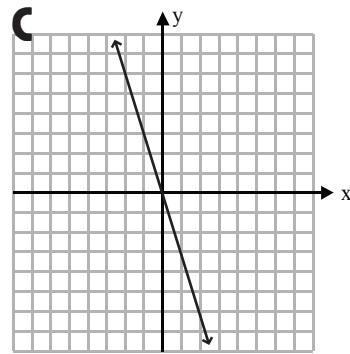
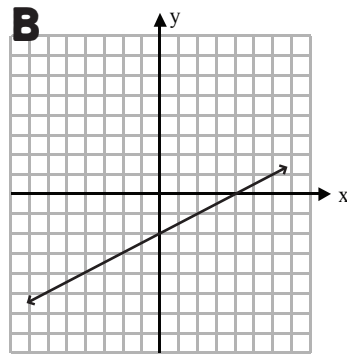
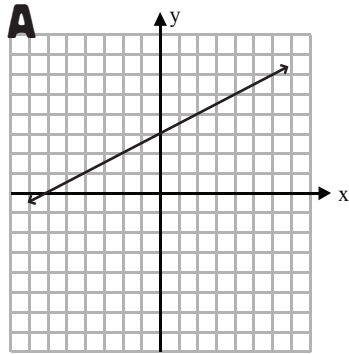


# WHO AM I?

Graphing slope-intercept



\_\_\_\_\_ (name)

## CLUES

My slope is 0.

\_\_\_\_\_

My slope is -3 and I pass through the origin.

\_\_\_\_\_

My slope is 3 and I pass through the origin.

\_\_\_\_\_

My slope is undefined.

\_\_\_\_\_

My slope is positive and my y-intercept is 2

\_\_\_\_\_

My slope is  $\frac{1}{2}$  and my y-intercept is 3.

\_\_\_\_\_

My slope is -4.

\_\_\_\_\_

I'm parallel to A and my y-intercept is -2.

\_\_\_\_\_

My slope is negative and my y-intercept is 2.

\_\_\_\_\_